







RANIGANJ LIONS J.D.M.C. D.A.V PUBLIC SCHOOL, RANIGANJ.W.B.
HOLIDAY HOMEWORK SESSION 2025 - 26
CLASS : IV

<u>SL. NO.</u>	<u>SUBJECT</u>	<u>HOMEWORK</u>
1.	ENGLISH	<p>A. Project Work:- *Travel Brochure* *Materials required*- A4 size paper(any colour), pencil, colours, a picture of the place that you recently visited. *Method*- At first students will fold the paper and on front part they will draw or paste a picture of the place they have visited recently. Inside the brochure they will write about the history and culture of the place, popular local attractions, cuisines etc.</p> <p>B. Answer the following questions :-*(to be done in English notebook) 1. Sports play a significant role in the life of human beings. Write four values that your favourite sport teach you in your life. 2. Raj forgave Rahul and became his friend again even after hearing about the betrayal. Give reasons. 3. Rewrite the sentences after changing the genders of the nouns in the following sentences. i) The bridegroom is riding on a horse. ii) My mother will invite all her nieces. iii) The Duke hunted a tiger.</p> <p>4. Write the collective nouns for the following naming words: i) A _____ of owls. ii) A _____ of dancers. iii) A _____ of robbers. iv) A _____ of toads.</p> <p>5. Write a letter to your friend describing your experience of spending summer vacation at your grandparent's house/village. (within 120 words)</p>
2.	HINDI	<p>1. गाँधी जी का सीख देने का ढंग अनोखा था। उन्होंने मनु को क्या सीख दी और कैसे?</p> <p>2. छोटेछोटे जीवों से भी हम जीवन में आगे- बढ़ने की प्रेरणा ले सकते हैं कैसे ? कविता उलटा पुलटा के आधार पर लिखिए।</p> <p>3. (क) नीचे दिए गए चित्रों के वे नाम लिखिए, जिनमें चंद्रबिंदु का प्रयोग हुआ हो-</p> <div style="display: flex; justify-content: space-around; align-items: flex-end;"> <div style="text-align: center;">(i) </div> <div style="text-align: center;">(ii) </div> <div style="text-align: center;">(iii) </div> <div style="text-align: center;">(iv) </div> </div> <p>(ख) “खुशी का ठिकाना ना रहा” मुहावरे से वाक्य बनाइए।</p> <p>(ग) दिए गए अक्षरों से दो-दो शब्द लिखिए -</p>

		<p>(i)  (ii) </p> <p>4. आपने अपनी पाठ्य पुस्तक में “उलटा-पुलटा” पाठ का अध्ययन किया। इस पाठ से आपको क्या शिक्षा मिली, यह बताते हुए अपने छोटे भाई को पत्र लिखिए।</p> <p>5. सुबह के दृश्य का एक सुंदर चित्र बनाकर एवं चित्र में दिखने वाले पाँच संज्ञा शब्दों को वेब चार्ट के माध्यम से दर्शाइए।</p> <p>नोट- प्रश्न संख्या 1-4 हिंदी की उत्तर पुस्तिका में तथा प्रश्न संख्या 5 स्कैप बुक में कीजिए।</p>
3.	BENGALI	<p>1. প্রশ্নগুলির সঠিক উত্তর লেখো।</p> <p>ক। " আমি বলি ইহার নাম 'শ্লোক' হউক " কোন প্রেক্ষাপটে শ্লোক তৈরি হল বর্ণনা করো।</p> <p>খ। তমসা নদীর সৌন্দর্য বর্ণনা করো।</p> <p>গ। পুরুত ঠাকুর রানি রাসমনির গালে চড় মেরেছিলেন কেন ?</p> <p>ঘ। দয়া , সাধুতা , সুখ , দুঃখ - এগুলি কোন ধরণের বিশেষ্য পদ এবং কেন ?</p> <p>ঙ। সমাপিকা এবং অসমাপিকা ক্রিয়াপদের পার্থক্য নির্ণয় করো।</p> <p>2. Project work:- চাট পেপারে রবীন্দ্রনাথ ঠাকুরের চিত্র সহ 'প্রভাতের রবি' অবলম্বনে রবীন্দ্রনাথ ঠাকুরের ছেলেবেলার কয়েকটি উল্লেখযোগ্য ঘটনা বর্ণনা করো।</p> <p>3. পাঠ্য বহির্ভূত একটি ছোটোদের উপযোগী কবিতা মুখস্থ করো।</p>
4.	MATHS	<p>1. Write down the greatest number of 5 digits and the smallest number of 6 digits. How much is the difference between the two?</p> <p>2. Find sum of the place value of 4 and 3 in the number 947635.</p> <p>3. Arrange in columns and add.</p> <p>(a) 7,69,230 , 20,160 and 2,123</p> <p>(b) 34,013 , 230 and 70,678</p> <p>4. In an examination, 30,345 candidates passed while 55,278 candidates failed. How many candidates appeared for the examination?</p> <p>5. A table costs Rs 4,580, whereas an almirah costs Rs. 10,710 more the cost of the table. Find the total cost of both the table and almirah.</p> <p>6. In 2011, the population of a town was 6, 75,890. If the number of males was 3, 98,170, find the females in the town.</p>

		<p>7.The difference between two numbers is 50,000 and the greater number is 1, 00,009. Find the smaller number.</p> <p>ACTIVITY</p> <p>1.Make a working model showing the place value of a 6 digit number using colourful paper strips.</p>
5.	SCIENCE	<p>A. Answer the following questions in one word-</p> <ol style="list-style-type: none"> Some birds like crows have four toes, three in the front and one at the back.They hold the branches of the trees very firmly and can even sleep at nights. What type of birds are they called? Which type of claws help the eagle and vulture to attack and eat small animals? Woodpeckers peck at the wood and eat insects present in it. Which type of beak help them to do so? Name the bird that catch tiny flying insects and flies which stick inside their mouth while flying? Wading birds have long legs and wide spreading toes. How does widely spread out toes help them? To find out : Probe : : To cut through : _____ <p>B Answer the following questions -</p> <ol style="list-style-type: none"> My beak is red,feathers are green. I imitate others voice. a) Who am I ? b) Name the type of beak and also write one use of such beak. How does the beak of duck help in sifting? All birds have different types of beaks and claws.They use them as per their needs and habits. Write any two uses of claws. When you go for a morning walk with your grandfather, there are different kinds of birds flying around you. List the name of any three birds and the food they eat. <p>Activity -</p> <p>Draw a web chart showing seven different types of beaks with their examples in the scrap book.</p> <p>NOTE – All the answers to be written in science notebook.</p>
6.	SOCIAL SCIENCE	<p>Answer the following questions:</p> <ol style="list-style-type: none"> How can we show appreciation and gratitude towards our family members? Write two points. List two occasions in which family members get together. Cite any two values that we get from such gatherings. Write two differences between Braille script and sign language. Identify your role being a responsible member of a society.

		<p>5. Suggest any three ways to encourage family unity.</p> <p>6. Draw the sign languages of the respective words.</p> <p>R -</p> <p>E -</p> <p>S -</p> <p>P -</p> <p>E -</p> <p>C -</p> <p>T -</p> <p>ACTIVIY-Make an album and write short descriptions of each family members .</p>
--	--	---
