





HOLIDAY HOMEWORK SESSION 2025 - 26

CLASS : VI

<u>SL. NO.</u>	<u>SUBJECT</u>	<u>HOMEWORK</u>
1.	ENGLISH	<p>[To be done in English Classwork Notebook]</p> <p>I. Answer the following questions briefly: a)What was Daddy's first choice of profession and why? b)What is the significance of leisure in our life? Why is modern man unable to appreciate the beauty of nature ?</p> <p>II. Write the adjective form of the following nouns: a) nation b)hope c) beauty d) sun e)gold</p> <p>III. All the verbs given below are in the present tense.Some of them are regular verbs and some are irregular verbs. Write the correct past tense form of each verb and circle the irregular verbs: a) bring b) serve c) learn d)drive e) enjoy</p> <p>IV.Imagine yourself to be the 'White Elephant.' Reflect on your feelings in the form of a diary entry in 80 to 100 words when your goodness is rewarded by treachery.</p> <p>V. Activity: [To be done in A4 sized Chart Paper]</p> <p>Draw and colour the face masks of the king, forester and the White Elephant. Write two characteristic features of each one of them.</p>
2.	HINDI	<p>1.नीचे दिए गए प्रश्नों के उत्तर लिखिए-</p> <p>(क) यदि कोई व्यक्ति अकेला ही सारे काम करेगा तो क्या होगा? अध्याय 'साथी हाथ बढ़ाना' के आधार पर अपने विचार व्यक्त कीजिए।</p> <p>(ख) महिपाल सिंह ने अपने जीवन में आई मुश्किल परिस्थितियों का सामना दृढ़ निश्चय से किया। आप अपने जीवन में आई मुश्किल परिस्थिति का सामना कैसे करेंगे? 'चिट्ठी के अक्षर' अध्याय के आधार पर लिखिए।</p> <p>2. (क)नीचे दिए गए चित्रों के नाम लिखिए-</p> <div style="display: flex; justify-content: space-around; align-items: center;">   </div> <p>(ख) नीचे दिए गए शब्दों में पाँचवें वर्ण के स्थान पर 'अनुस्वार' चिह्न लगाइए-</p> <p>(i) डण्डा (ii) कम्पन (iii) अम्बर (iv) गन्दा</p>

		<p>(ग) नीचे दिए गए शब्दों के सही वर्तनी लिखिए-</p> <p>(i) आविस्कार (ii) व्यक्ति</p> <p>3. मेहनत और मिल- जुलकर काम करने के महत्त्व के बारे में बताते हुए अपने छोटे भाई को (80-100 शब्दों में) पत्र लिखिए।</p> <p>4. तुकांत वाले शब्दों का एक आकर्षक पेड़ बनाइए और उन शब्दों से संबंधित पाँच चित्र चिपकाइए।</p> <p>नोट:-</p> <p>* प्रश्न 1 से लेकर 3 तक उत्तर अपनी हिंदी की उत्तर पुस्तिका में लिखिए।</p> <p>* चौथा प्रश्न गतिविधि है। उसे A/4 साइज़ पेपर पर कीजिए।</p>
3.	BENGALI	<p>১) প্রদত্ত প্রশ্নগুলির সঠিক উত্তর বেছে নিয়ে লেখো। To be done in Bengali Classwork notebook.</p> <p>ক) মন্তব্য: ক থেকে ম পর্যন্ত ২৫ টি বর্ণকে স্পর্শ বর্ণ বলা হয়।</p> <p>যুক্তি: এগুলি উচ্চারণের সময় শ্বাসবায়ু বাধা পায় না।</p> <p>i) মন্তব্য ঠিক, যুক্তি ভুল iii) মন্তব্য ও যুক্তি উভয়ই ঠিক</p> <p>ii) মন্তব্য ভুল, যুক্তি ঠিক iv) মন্তব্য ও যুক্তি উভয়ই ভুল</p> <p>খ) চ, ছ, জ, ঝ এদের যে কোনো একটি বর্ণের সঙ্গে 'ঞ' যুক্ত হলে তার উচ্চারণ হয়-</p> <p>i) জ্ঞ এর মতো ii) ন এর মতো iii) ঙ এর মতো iv) জ্ঞ এর মতো</p> <p>গ) মন্তব্য: ত্রৈলোক্য প্রিয় মুখুয়াকে বলেছিল, 'এ গায়ে আপনি ছাড়া আর মানুষ নেই।'</p> <p>যুক্তি: তিনি গরীব দুঃখীদের সাহায্য করতেন।</p> <p>i) মন্তব্য ঠিক, যুক্তি ভুল iii) মন্তব্য ও যুক্তি উভয়ই ঠিক</p> <p>ii) মন্তব্য ভুল, যুক্তি ঠিক iv) মন্তব্য ও যুক্তি উভয়ই ভুল</p> <p>ঘ) সে যুগে গুরু ছাত্রদের শিক্ষা দিতেন তাদের-</p> <p>i) পাণ্ডিত্য, সহিষ্ণুতা ও গুরুভক্তি দেখে iii) জ্ঞানস্পৃহা, সহিষ্ণুতা ও গুরুভক্তি দেখে</p>

		<p>ii) পাণ্ডিত্য, জ্ঞানস্পৃহা ও গুরুভক্তি দেখে iv) জ্ঞানস্পৃহা, সহিষ্ণুতা ও শ্রদ্ধা দেখে</p> <p>ঙ) মন্তব্য: কাজি প্রকাশ্যভাবে সংকীর্তন বন্ধ করে দিলেন।</p> <p>যুক্তি: কিছু বৈষ্ণব বিরোধী লোক কাজির কাছে গিয়ে নালিশ করেছিল।</p> <p>i) মন্তব্য ঠিক, যুক্তি ভুল iii) মন্তব্য ও যুক্তি উভয়ই ঠিক</p> <p>ii) মন্তব্য ভুল, যুক্তি ঠিক iv) মন্তব্য ও যুক্তি উভয়ই ভুল</p> <p>2) নিম্নলিখিত প্রশ্নগুলির যথাযথ উত্তর দাও।</p> <p>ক) ‘দেশে যখন এই রকম অরাজক অবস্থা চলছিল...’ – কী ধরনের অরাজক অবস্থার কথা বলা হয়েছে বলে তোমার মনে হয়?</p> <p>খ) ‘পাগলা ঠাকুর ছাড়া গরীব-দুঃখীর দরদও কেউ বোঝে না।’ – কে কার সম্পর্কে একথা বলেছে? কেন একথা বলা হয়েছে বলে তোমার মনে হয়?</p> <p>Project Work To be done in A4 size chart paper.</p> <p>গুরুকুল শিক্ষা ব্যবস্থা এবং আধুনিক শিক্ষা ব্যবস্থার চিত্রসহ উভয়ের সাদৃশ্য ও বৈসাদৃশ্যের তালিকা প্রস্তুত কর।</p>
4.	MATHS	<p>1. <u>CASE STUDY:</u></p>  <p>A juice seller has three different types of fruit juices: apple juice, orange juice, and pineapple juice. He has 36 litres of apple juice, 48 litres of orange juice, and 60 litres of pineapple juice.</p> <p><u>Answer the following questions based on the above data:</u></p> <p>i) What is the least capacity of a container that can be used to store each type of juice exactly without any juice left over?</p> <p>ii) Find product of HCF and LCM of 36, 48 and 60.</p>

		<p>iii) If he arranged the juices in packs of 6 litres each, how many packs will he get for each juice?</p> <p>2. Mr. Mohan earns ₹60,000 per month. He spent one-third of his earnings on food, one-fourth on children's education, one-fifth on other expenses.</p> <p>i) Find the amount he spent on children's education.</p> <p>ii) How much money he saved?</p> <p>3. Estimate: $2514 + 7394 + 752$</p> <p>4. What will be the roman numeral for the year of independence of India?</p> <p>5. Give example of two pairs of co-prime numbers.</p> <p>6. Express 133 as the sum of three odd prime numbers.</p> <p style="text-align: center;"><u>ACTIVITY</u></p> <p>Make a colourful activity using coloured paper strips on divisibility rules from 2 to 11 along with suitable examples.</p>
5.	SCIENCE	<p>Note: To be done in Science class work notebook</p> <p>1. Make a mind map on the components of our environment.</p> <p>2. Polar bears are facing a threat to their survival. Give two reasons.</p> <p>3. Give example of terrestrial food chain.</p> <p>4. Identify the process and state two advantages of the same.</p>  <p>5. Read the passage given below and answer the following questions.</p> <p>Plants growing in ponds, lakes and rivers have their roots fixed in the soil below the water. In terrestrial plants, roots normally play a very important role in the absorption of nutrients and water from the soil. However, in aquatic plants, roots are much reduced in size and their main function is to hold the plant in place. The stems of these plants are long, hollow and light. The stems grow up to the surface of water while the leaves and flowers, float on the surface of water. Some aquatic plants are submerged in water. All parts of such plants are under water. Some of these plants have narrow and thin ribbon-like leaves. These can bend in the flowing water.</p> <p>(a) Give two examples of hydrophytes that are partially submerged in water.</p>

		<p>(b) Differentiate between terrestrial plants and aquatic plants on basis of roots only.</p> <p>(c) Write two important characteristics of leaves of aquatic plants.</p> <p>6. A and B are two types of terrestrial plants. Type A is found to be in the desert whereas type B is found to grow on lands like grasslands. Write two structural differences between A and B.</p> <p>7. Express photosynthesis in terms of word equation.</p> <p>ACTIVITY : To be done in A4 size chart paper.</p> <p>Make a collage of any one primary consumer by using biodegradable materials available at home.</p>
6.	SOCIAL SCIENCE	<p>Activity Title: "Community Helpers in My Locality"</p> <p>Instructions:</p> <ol style="list-style-type: none"> Choose any three community helpers from your neighborhood (e.g., postman, doctor, garbage collector, watchman, gardener, etc.). Write the following for each helper: Name (if known) Occupation Tools or equipment they use How their work helps the community A drawing or picture of the helper Write a short paragraph (4–5 lines) on how we can respect and support community helpers. Decorate your sheet neatly and creatively. Use two A4 size paper for the activity. <p>Answer the following questions:</p> <p>N.B: TO BE DONE IN CLASS WORK COPY</p> <p>1. Case Study:</p> <p>In a town Bhavpur, most people earn a living through farming. The land is fertile, and the farmers grow crops like rice, sugarcane, and vegetables. There is a small primary school in the village where children study and a few small shops selling basic items. The village is connected by a dirt road, and there is limited access to healthcare and modern facilities. The villagers depend on each other for social gatherings and work together during harvest seasons.</p> <p>In a City - Metroville, the community is busy and fast-paced. People work in offices, shops, and factories. Many children attend large schools with modern facilities, and transportation is easily available with buses, trains, and cars. The city has numerous healthcare centers and shopping malls. However, due to the busy lifestyle, people tend to have fewer personal interactions and often rely on technology for communication.</p>

		<p>Read the given extract and answer the following</p> <p>A . Identify the communities referred to in the above passage?</p> <p>B. Point out any 3 differences between the two communities.</p> <p>2. Imagine you are a historian. You find an old coin in an archaeological site. What information could this coin provide about the past?</p> <p>3. Find out the difference between a comet and a meteoroid. Explain with examples.</p> <p>4. If today is a Full Moon night, what phase will appear after a) one week b) fifteen days c) 28 days. Explain your answer with a suitable diagram.</p> <p>5. Literary sources help us learn about the culture and lifestyle of ancient people. Justify the statement with one example from each form of literary source.</p>
7.	SANSKRIT	<p>गतिविधि: – भवान्/भवती प्रतिदिनं विद्यालये अनेकानि वस्तूनि पश्यति। केषां पञ्च-चित्राणि रचयित्वा वर्णैः रञ्जयित्वा च नामानि लिखन्तु। (On the A4 size paper).</p> <p>1. उपयुक्तपदैः रिक्तस्थानानि पूरयत-</p> <p>(क) _____ प्रपच्छ रे प्रगाय _____।</p> <p>(ख) _____ रक्षणे प्रयच्छ वीर! _____।</p> <p>(ग) शिरः कुरु _____ _____ मा क्वचिद् भयम्।</p> <p>2. मञ्जुषायां प्रदत्त-पदैः पर्यायपदं चित्वा लिखन्तु-</p> <p>(क) यह _____।</p> <p>(ख) बड़ा _____।</p> <p>(ग) आगे आगे _____।</p> <p>(घ) धैर्य _____।</p>

		<p>(ड) खेल के मैदान _____।</p> <p>मञ्जुषा - (विशालः, पुरः पुरः, एषः, क्रीडाङ्गण, धृतिः)</p> <p>3.वर्ण-विन्यासं कुर्वन्तु-</p> <p>(क) प्रतिदिनम् _____</p> <p>(ख) वृषभः _____</p> <p>(ग) मिलित्वा _____</p> <p>(घ) शीघ्रम् _____</p> <p>(ड) सुकौशलम् _____</p> <p>4.उचित सर्वनामपदैः रिक्तस्थानानि पूरयन्तु-</p> <p>(क) _____ बालिका।</p> <p>(ख) _____ फलम्।</p> <p>(ग) _____ द्वौ बालकौ।</p> <p>(घ) _____ पुस्तकानि।</p> <p>(ड) _____ रमा?</p> <p>मञ्जुषा - (एतत्, का, एतौ, एतानि, एषा)</p> <p>NOTE - ग्रीष्मावकाशस्य सर्वाणि उत्तराणि संस्कृत-अभ्यासपुस्तिकायाम् एव कुर्वन्तु।</p>
--	--	---
